

Midpoint and Distance Formulas

© 2011 Kuta Software LLC. All rights reserved.

Date _____ Period _____

Find the midpoint of the line segment with the given endpoints.

1) $(-4, -2), (3, 3)$

2) $(-1, 0), (-3, -4)$

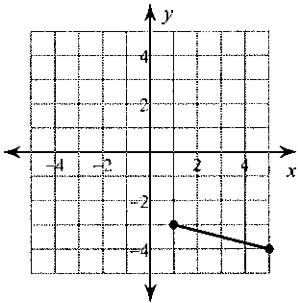
Find the other endpoint of the line segment with the given endpoint and midpoint.

3) Endpoint: $(-5, 4)$, midpoint: $(-10, -6)$

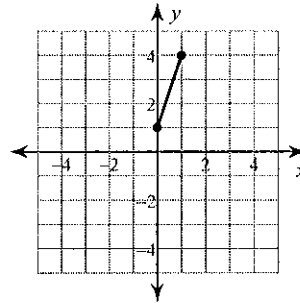
4) Endpoint: $(-8, 8)$, midpoint: $(5, -3)$

Find the midpoint of each line segment.

5)



6)



Find the distance between each pair of points. Round your answer to the nearest tenth, if necessary.

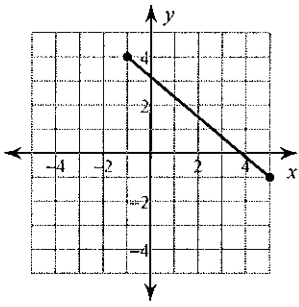
7) $(7, 6), (0, 2)$

8) $(4, 2), (-6, -6)$

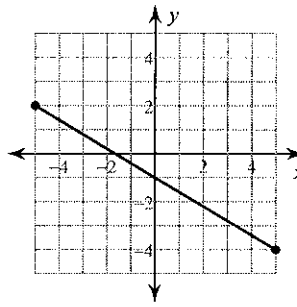
9) $(-6, 1), (-3, 1)$

10) $(-3, 6), (2, 1)$

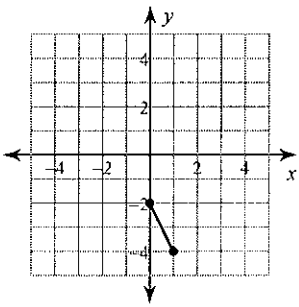
11)



12)



13)



14)

