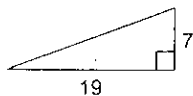
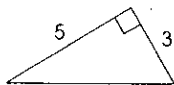


Finding the missing leg or Hypotenuse *show all work!

2)



4)

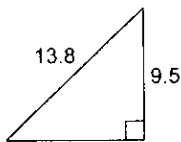


6) $a = 6, b = 3, c = ?$

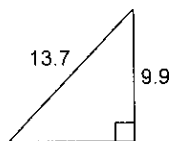
8) $a = 17, b = 16, c = ?$

10) $a = 7, b = 7, c = ?$

12)



14)



16) $a = ?, b = 6, c = 17$

18) $a = 15, b = ?, c = 20$