

Transformations of Functions

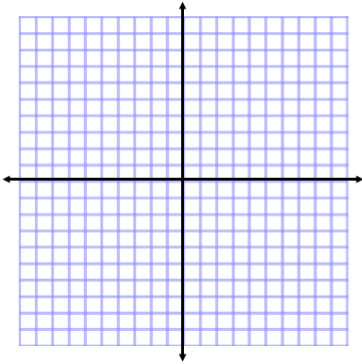
Name _____ Date _____

Give the name of the parent function and describe the transformation represented.

1. $g(x) = x^2 - 1$

Parent: _____

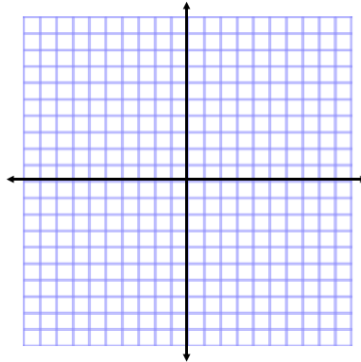
Transformations: _____



2. $f(x) = 2|x-1|$

Parent: _____

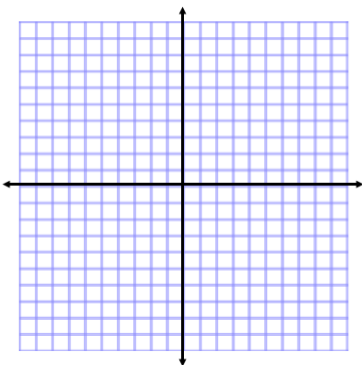
Transformations: _____



3. $h(x) = -3^x - 2$

Parent: _____

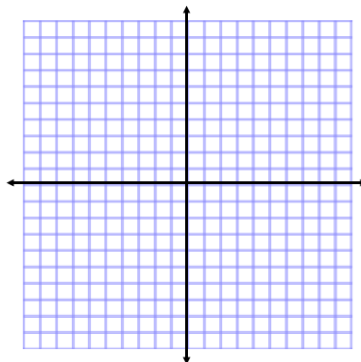
Transformations: _____



4. $g(x) = -2(x+1)^2 + 3$

Parent: _____

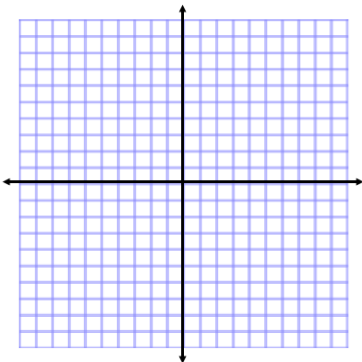
Transformations: _____



5. $g(x) = -3x - 2$

Parent: _____

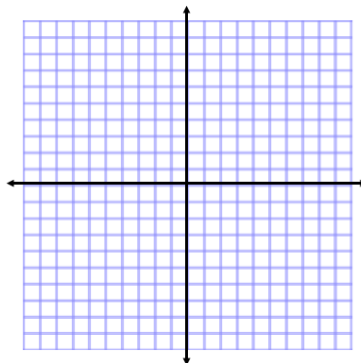
Transformations: _____



6. $f(x) = |x + 5| - 2$

Parent: _____

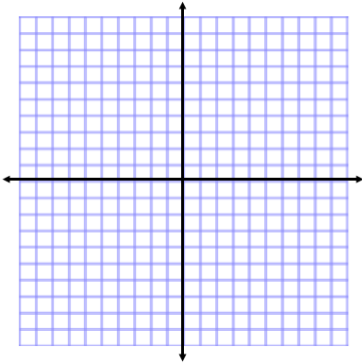
Transformations: _____



7. $h(x) = -x^2 + 1$

Parent: _____

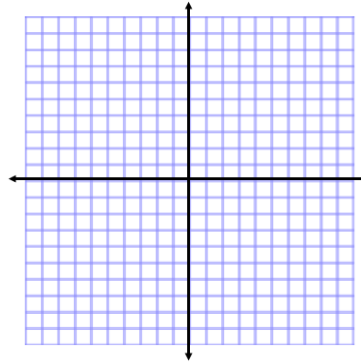
Transformations: _____



8. $h(x) = -|x - 2|$

Parent: _____

Transformations: _____



Given the parent function and a description of the transformation, write the equation of the transformed function, $f(x)$.

11. Absolute Value — vertical shift up 5, horizontal shift right 3. _____

12. Linear — vertical stretch/compression by $\frac{2}{5}$ _____

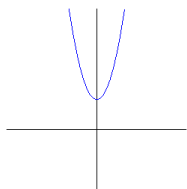
13. Logarithmic — flipped over the x axis, vertical shift down 2 _____

14. Exponential — vertical stretch by 8 _____

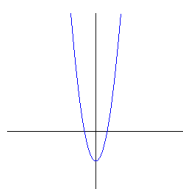
15. Quadratic — vertical stretch by 5, horizontal shift left 8. _____

16. Which graph best represents the function $f(x) = 2x^2 - 2$?

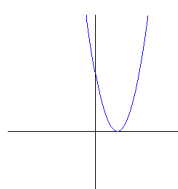
a.



b.



c.



d.

